


Name: \_\_\_\_\_

USE YOUR NUMBERLINE

1. Riley had 3 balloons. Vanessa had 6 balloons and Zoe had 4 balloons. How many balloons did they have in all?

\_\_\_\_\_ balloons



2.  $23 =$  \_\_\_\_\_ tens and \_\_\_\_\_ ones

3. Add or Subtract.

$13 + 4 = \underline{\quad}$

$9 - 2 = \underline{\quad}$

$10 + 8 = \underline{\quad}$

$17 - 5 = \underline{\quad}$

$8 + 4 = \underline{\quad}$

$15 - 9 = \underline{\quad}$

- 
1. What are the two words that make the compound word?

snowman \_\_\_\_\_

2. How many syllables are in the word? balloon \_\_\_\_\_

3. What is the base word? hats \_\_\_\_\_

4. Circle the words with the long /o/ sound.

home not log tone float cone song goat toe

5. Correct the sentence.

the kids had fUn at the party

---

Standards:

USE YOUR  
NUMBERLINE

Name: \_\_\_\_\_

Favorite Class


Math	X X X X X X X X X X X X X
Reading	X X X X X X X X X X X
Science	X X X X X X X X X X X X X X

1. Which class got the MOST votes? \_\_\_\_\_
  2. Which class had 11 votes? \_\_\_\_\_
  3. How many more votes did Science get than Math? \_\_\_\_\_
  4. What is your favorite class? \_\_\_\_\_
- 

Complete each sentence using words from the box below.

four	new	blue	fun
------	-----	------	-----

1. The hat was \_\_\_\_\_.
2. She had a \_\_\_\_\_ hat.
3. The party was \_\_\_\_\_.
4. He had \_\_\_\_\_ balloons.




--

--

Name: \_\_\_\_\_

Tuesday Week 2

5. Circle the equation that matches the picture.



$6 - 4 = 2$

$4 + 2 = 6$

$4 + 6 = 10$

2. Which number is 10 LESS than 55? \_\_\_\_\_

3.  $4 + \underline{\quad} = 12$

4. What time is it?



\_\_\_\_\_ o'clock

Add the correct punctuation mark.

2. We won the game \_\_\_\_

3. Did you go skiing \_\_\_\_

4. The kids played hockey \_\_\_\_

5. Are you going ice skating \_\_\_\_

6. He went snowboarding \_\_\_\_



Standards:

\_\_\_\_\_

\_\_\_\_\_


Name: \_\_\_\_\_

USE YOUR NUMBERLINE

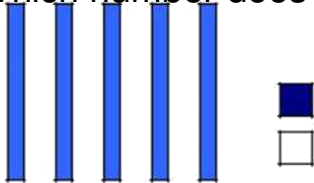
6. Kathy saw 7 penguins. Laura counted 4 penguins and Amy saw 6 penguins. How many penguins did they see in all?

\_\_\_\_\_ penguins

5. Circle the group that is in order from tallest to shortest.



7. Which number does the model show?



\_\_\_\_\_

4. Draw a shape with 4 sides.

Sort the nouns and verbs.

moose	howl	whale	swim
igloo	build	fishing	snow



noun

verb

\_\_\_\_\_  
\_\_\_\_\_  
\_\_\_\_\_

\_\_\_\_\_  
\_\_\_\_\_  
\_\_\_\_\_

\_\_\_\_\_

\_\_\_\_\_

---

---